


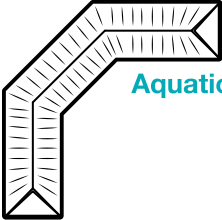

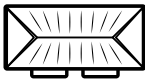

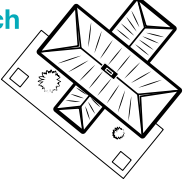

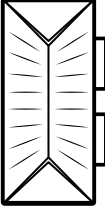


Where are the community groups?

On the community map, find and write the names of different groups that may use each place. More than one group may use each facility.

<p>Movie theatre</p> 	<p>Bike park</p> 	<p>Scout hall</p> 
<p>Aquatics centre</p> 	<p>School oval</p> 	
<p>Sporting fields</p>  <div style="border: 1px solid black; height: 20px; width: 100%; margin-top: 5px;"></div> <div style="border: 1px solid black; height: 20px; width: 100%; margin-top: 5px;"></div> <div style="border: 1px solid black; height: 20px; width: 100%; margin-top: 5px;"></div>	<p>Skate park</p> 	<p>Church</p> 
<p>Music centre</p> 	<p>Community hall</p> 	<p>Lake</p> 